
















Jack's Farm Animals

				
				
				
				
				
Goat	Cow	Chicken	Horse	Pig

1. Of which animal does Jack have the fewest?
2. How many goats does he have on his farm?
3. How many more chickens are there than cows?
4. How many pigs does he have?
5. Of which animal does Jack have more than 2? (You may have more than one answer – list them all).
6. How many animals are there in total on the farm?